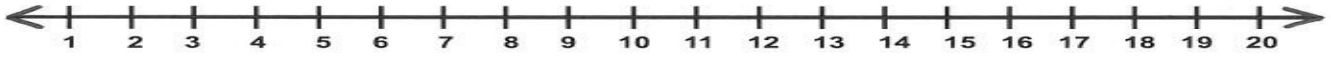


2) $20 - 6 =$ _____



3) $18 - 4 =$ _____



4) $19 - 3 =$ _____



Q3. Name the following

1) I have 6 flat faces, 12 edges and 8 vertices. All my edges are same length?

Ans: _____.

2) I have one flat face and one curved face. My flat face is circular in shape

Ans: _____.

3) I am perfectly round. I don't have flat faces and I don't have straight edges.

Ans: _____.

Q4. Complete the patterns:

1) AB , CD , EF , _____ , _____ , _____

2) 10 , 20 , 30 , _____ , _____ , _____

3) ○, ◇, ○ _____

4) I, III, IIII, _____, _____

5) 12, AB, 34, CD, _____, _____

6) 100, 200, 300, _____, _____

Q5- Subtract the following:

1) H T O

$$\begin{array}{r} 659 \\ - 425 \\ \hline \end{array}$$

2) H T O

$$\begin{array}{r} \square \square \\ 826 \\ - 741 \\ \hline \end{array}$$

3) H T O

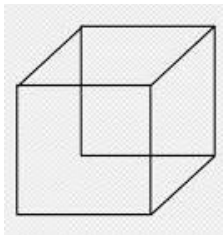
$$\begin{array}{r} \square \square \\ 554 \\ - 364 \\ \hline \end{array}$$

4) H T O

$$\begin{array}{r} 431 \\ - 220 \\ \hline \end{array}$$

Q.7. Identify the shapes and label it:

1)

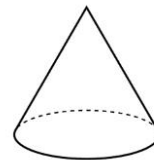


Vertices: _____

Faces : _____

Edges: _____

2)

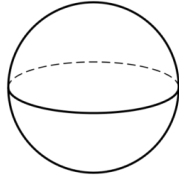


Vertices: _____

Faces: _____

Edges: _____

3)



Vertices: _____

Faces: _____

Edges: _____

Q.6. Story sums:

1) Rashmi has 858 crayons in her art box out of which she gave 547 crayons to her sister. How many crayons are left in her art box now?

<p>Step 1: _____</p> <p>Step 2: _____</p> <p>Step 3: _____</p> <p>Ans: _____</p>	
--	--

2) Sunny bought 536 pencils of red and blue colour from the shop but if out of them 280 are of red in colour. How many blue pencils did Sunny has ?

<p>Step 1: _____</p> <p>Step 2: _____</p> <p>Step 3: _____</p> <p>Ans: _____</p>	
--	--

Q.7. HOTS

1) On Thursday Imran the builder laid 30 bricks. On Friday he laid 19 bricks. Which day did he lay less bricks and how many?

Ans. _____.

